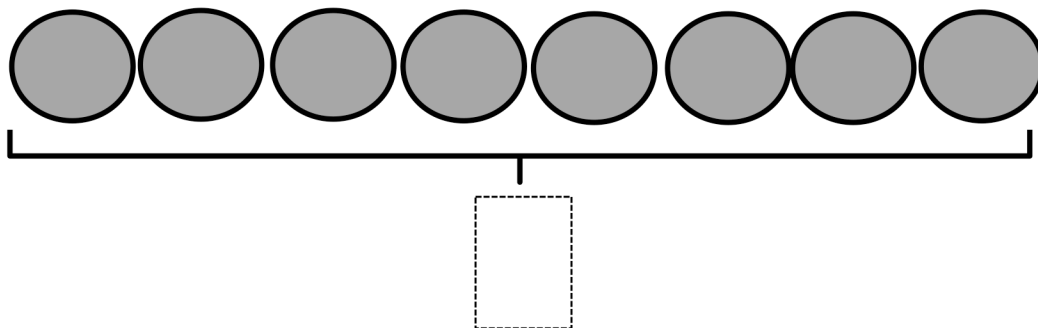
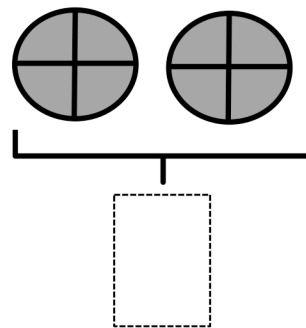
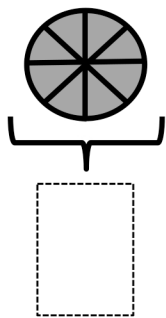
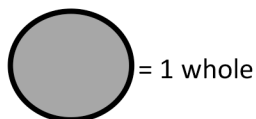
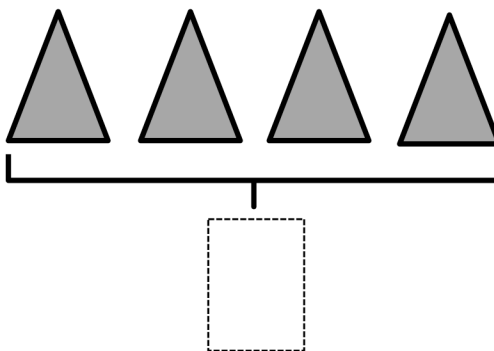
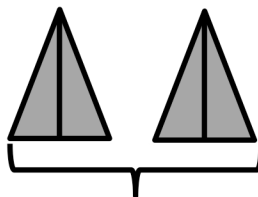
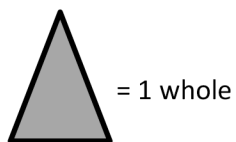


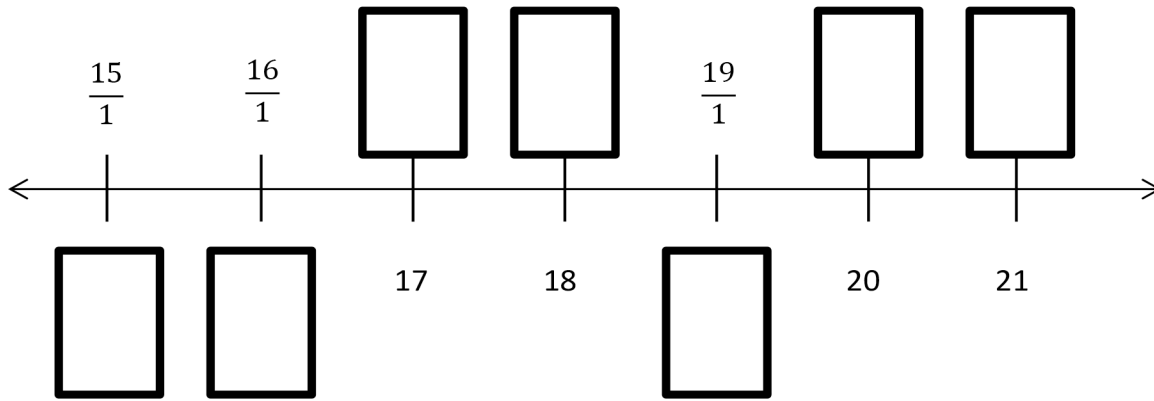
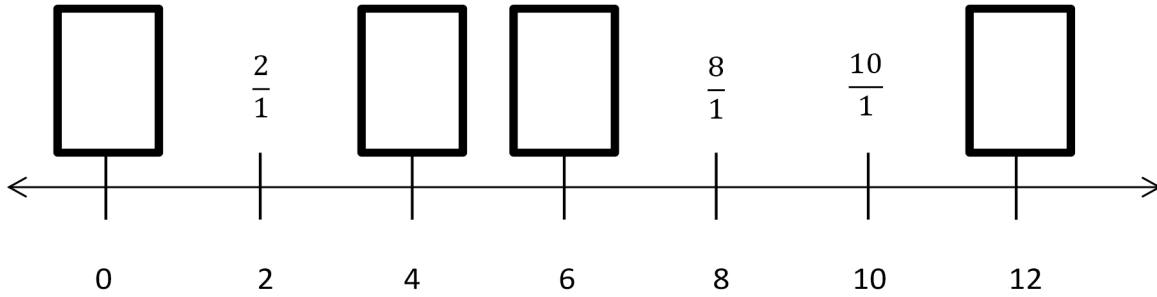
Name \_\_\_\_\_

Date \_\_\_\_\_

1. Label the following models as fractions inside the boxes.



2. Fill in the missing whole numbers in the boxes below the number line. Rename the wholes as fractions in the boxes above the number line.



3. Explain the difference between these fractions with words and pictures.

$$\frac{5}{1} \qquad \frac{5}{5}$$

## Answer Key

1.  $\frac{4}{4}, \frac{4}{2}, \frac{4}{1}, \frac{8}{8}, \frac{8}{4}, \frac{8}{1}$

2.  $\frac{0}{1}, \frac{4}{1}, \frac{6}{1}, \frac{12}{1}$   
 $15, 16, \frac{17}{1}, \frac{18}{1}, 19, \frac{20}{1}, \frac{21}{1}$

3. Explanations will vary.