

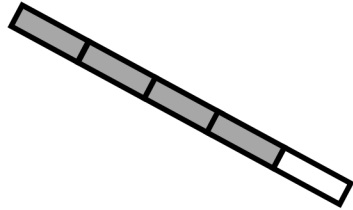



Name _____

Date _____


1. Each shape is a whole divided into equal parts. Name the fractional unit, and then count and tell how many of those units are shaded. The first one is done for you.



Fourths

2 fourths are shaded.

2. Each shape is 1 whole. Estimate to divide each into equal parts. Divide each whole using a different fractional unit. Write the name of the fractional unit on the line below the shape.



3. Anita uses 1 sheet of paper to make a calendar showing each month of the year. Draw Anita's calendar. Show how she can divide her calendar so that each month is given the same space. What fraction of the calendar does each month receive?

Each month receives _____.

Answer Key

1. Fifths; 4 fifths
Sixths; 3 sixths
Halves; 0 halves
2. Answers will vary.
3. Answers will vary; 1 twelfth