


Name _____

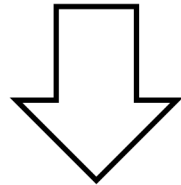
Date _____

Each shape is 1 whole. Estimate to equally partition the shape and shade to show the given fraction.

1. 1 half




A



B




C



D


2. 1 fourth




A



B




C



D

3. 1 third




A



B



C



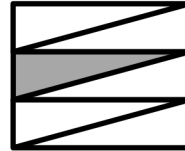
D

4. Each of the shapes represents 1 whole. Match each shape to its fraction.

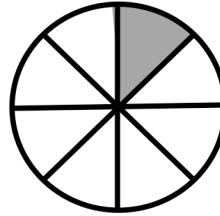
1 fifth



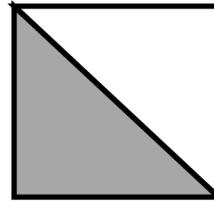
1 twelfth



1 third



1 fourth



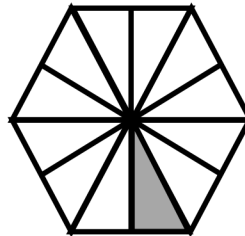
1 half



1 eighth



1 tenth



1 sixth



Answer Key

1. Lines drawn to show halves for each figure
2. Lines drawn to show fourths for each figure
3. Lines drawn to show thirds for each figure
4. Fractions matched to equivalent shape