







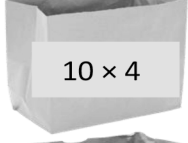











































Name \_\_\_\_\_

Date \_\_\_\_\_

1. Skip-count by fours. Match each answer to the appropriate expression.

				<input type="text" value="4"/>	         
				<input type="text"/>	
				<input type="text"/>	
				<input type="text"/>	
				<input type="text"/>	
				<input type="text"/>	
				<input type="text"/>	
				<input type="text"/>	
				<input type="text"/>	
				<input type="text"/>	

2. Lisa places 5 rows of 4 juice boxes in the refrigerator. Draw an array and skip-count to find the total number of juice boxes.

There are \_\_\_\_\_ juice boxes in total.

---

3. Six folders are placed on each table. How many folders are there on 4 tables? Draw and label a tape diagram to solve.

4. Find the total number of corners on 8 squares.

## Answer Key

1. 8, 12, 16, 20, 24, 28, 32, 36, 40

Answer provided; 8 matched to  $2 \times 4$ ; 12 matched to  $3 \times 4$ ; 16 matched to  $4 \times 4$ ; 20 matched to  $5 \times 4$ ; 24 matched to  $6 \times 4$ ; 28 matched to  $7 \times 4$ ; 32 matched to  $8 \times 4$ ; 36 matched to  $9 \times 4$ ; 40 matched to  $10 \times 4$

2. Array of 5 rows of 4 drawn; skip-count shown as 4, 8, 12, 16, 20; 5, 20; 20

3. 24; tape diagram drawn and labeled to represent problem

4. 32