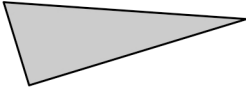
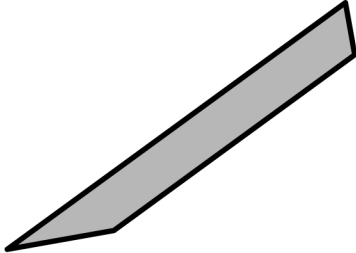

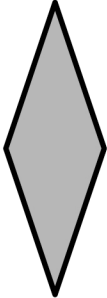



Name \_\_\_\_\_


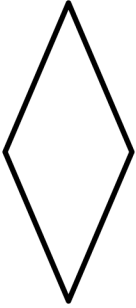
Date \_\_\_\_\_

1. Complete the chart by answering true or false.

Attribute	Polygon	True or False
<i>Example:</i> <b>3 Sides</b>		True
<b>4 Sides</b>		
<b>2 Sets of Parallel Sides</b>		
<b>4 Right Angles</b>		
<b>Quadrilateral</b>		

2.

- a. Each quadrilateral below has at least 1 set of parallel sides. Trace each set of parallel sides with a colored pencil.



- b. Using a straightedge, sketch a different quadrilateral with at least 1 set of parallel sides.

## Answer Key

1. Answer provided  
True  
True  
False  
True
2. a. Parallel sides traced with a colored pencil  
b. A shape with at least 1 set of parallel sides drawn