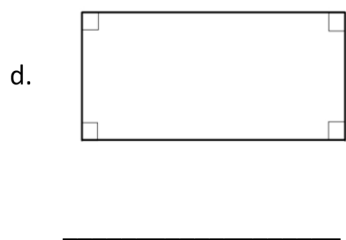
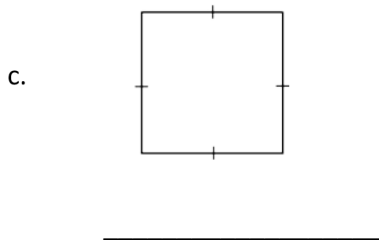
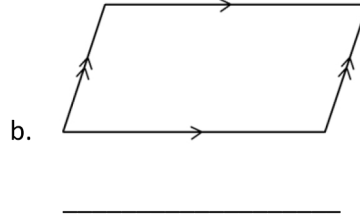
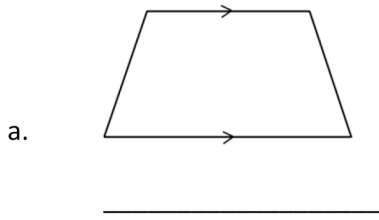


Name _____

Date _____

1. Use the word bank to name each shape, being as specific as possible.

Parallelogram	Trapezoid	Rectangle	Square
---------------	-----------	-----------	--------



2. Explain the attribute that makes a square a special rectangle.

3. Explain the attribute that makes a rectangle a special parallelogram.

4. Explain the attribute that makes a parallelogram a special trapezoid.

5. Construct the following figures based on the given attributes. Give a name to each figure you construct. Be as specific as possible.

a. A quadrilateral with four sides the same length and four right angles.

b. A quadrilateral with two sets of parallel sides.

c. A trapezoid with only one set of parallel sides.

d. A parallelogram with four right angles.

Answer Key

1.
 - a. Trapezoid
 - b. Parallelogram
 - c. Square
 - d. Rectangle
2. Sides of equal length; explanations will vary.
3. Four right angles; explanations will vary.
4. Two parallel pairs; explanations will vary.
5.
 - a. Figure accurately constructed; square
 - b. Figure accurately constructed; parallelogram (or rectangle or square)
 - c. Figure accurately constructed; trapezoid
 - d. Figure accurately constructed; rectangle (or square)