


Name \_\_\_\_\_

Date \_\_\_\_\_

Use the grid to construct the following. Name the figure you drew using one of the terms in the word box.

1. Construct a quadrilateral with only one set of parallel sides.

Which shape did you create?



**WORD BOX**

Parallelogram

Trapezoid


Rectangle

Square

Rhombus


2. Construct a quadrilateral with one set of parallel sides and two right angles.

Which shape did you create?




3. Construct a quadrilateral with two sets of parallel sides.


Which shape did you create?



4. Construct a quadrilateral with all sides of equal length.  
Which shape did you create?



5. Construct a rectangle with all sides of equal length.  
Which shape did you create?



## Answer Key

1. Figure accurately constructed; figures will vary; trapezoid
2. Figure accurately constructed; figures will vary; rectangle.
3. Figure accurately constructed; Figures will vary; parallelogram
4. Figure accurately constructed; figures will vary; rhombus
5. Figure accurately constructed; figures will vary; square