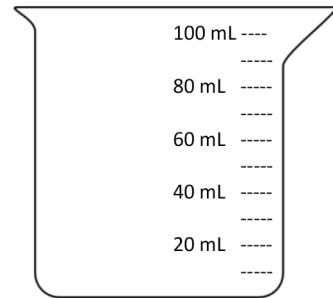


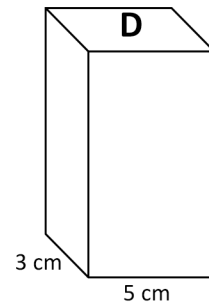
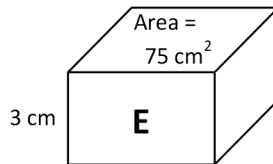
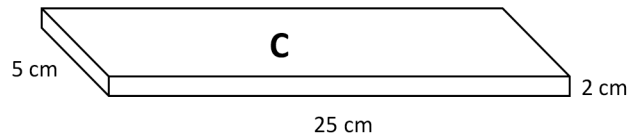
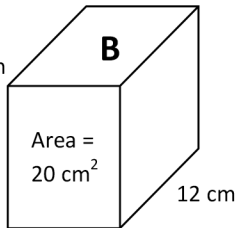
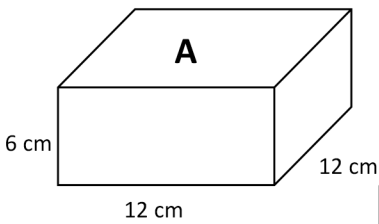
Name _____

Date _____

1. Johnny filled a container with 30 centimeter cubes. Shade the beaker to show how much water the container will hold. Explain how you know.



2. A beaker contains 250 mL of water. Jack wants to pour the water into a container that will hold the water. Which of the containers pictured below could he use? Explain your choices.



3. On the back of this paper, describe the details of the activities you did in class today. Include what you learned about cubic centimeters and milliliters. Give an example of a problem you solved with an illustration.

Answer Key

1. Beaker shaded to line between 20 mL and 40 mL; explanations will vary.
2. A; C; explanations will vary.
3. Answers will vary.