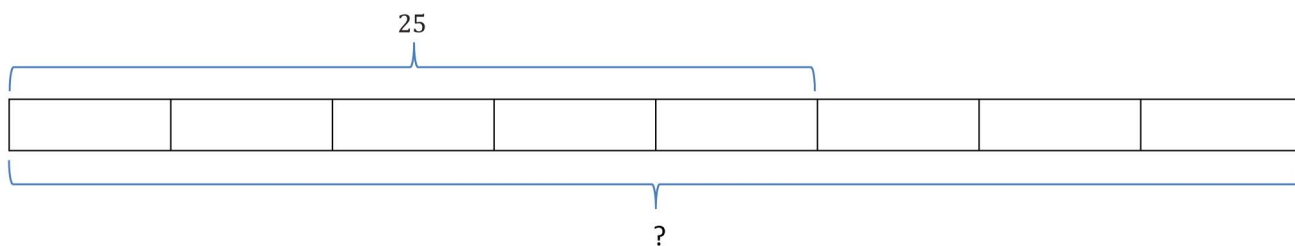


Name _____

Date _____

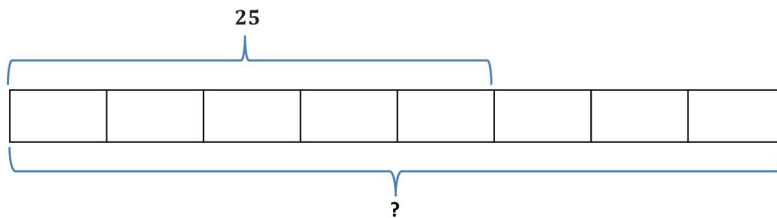
More Division Stories

Write a word problem for the following partitive division: $25 \div \frac{5}{8} = 40$.



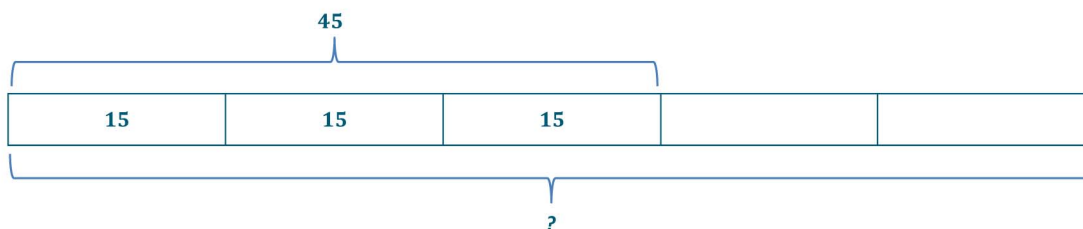
1. Write a partitive division story problem for $45 \div \frac{3}{5}$.
2. Write a partitive division story problem for $100 \div \frac{2}{5}$.

Write a word problem for the following partitive division: $25 \div \frac{5}{8} = 40$.



Zolanda spent $\frac{5}{8}$ of her class period, or 25 minutes, taking notes. How long was the class period? (Accept any other reasonable story problem showing $25 \div \frac{5}{8} = 40$.)

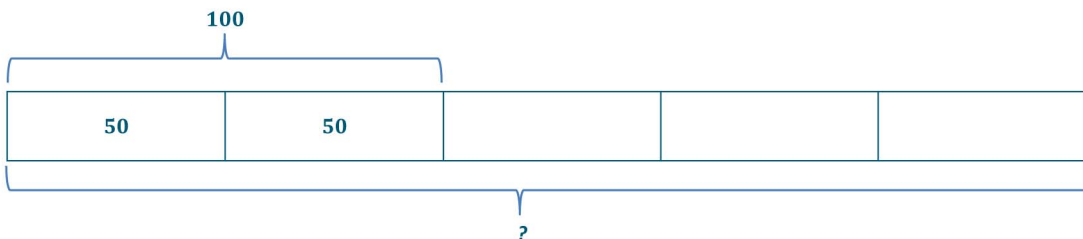
1. Write a partitive division story problem for $45 \div \frac{3}{5}$.



Answers may vary, but an example of a division story is provided.

Samantha Maria spent $\frac{3}{5}$ of her money, or \$45, on a pair of earrings. How much money did she have before she bought the earrings?

2. Write a partitive division story problem for $100 \div \frac{2}{5}$.



Answers may vary, but an example of a division story is provided.

There are 100 girls in the college marching band, which is $\frac{2}{5}$ of the total. How many members are there all together in the band?